

Write your name here

Surname

Other names

**Pearson Edexcel
International GCSE**

Centre Number

--	--	--	--	--

Candidate Number

--	--	--	--

Further Pure Mathematics

Paper 1

Monday 19 January 2015 – Afternoon
Time: 2 hours

Paper Reference

4PM0/01

Calculators may be used.

Total Marks

Instructions

- Use **black** ink or ball-point pen.
- **Fill in the boxes** at the top of this page with your name, centre number and candidate number.
- Answer **all** questions.
- Without sufficient working, correct answers may be awarded no marks.
- Answer the questions in the spaces provided
– *there may be more space than you need.*

Information

- The total mark for this paper is 100.
- The marks for **each** question are shown in brackets
– *use this as a guide as to how much time to spend on each question.*

Advice

- Read each question carefully before you start to answer it.
- Check your answers if you have time at the end.

Turn over ►

P44029A

©2015 Pearson Education Ltd.

6/1/1/



PEARSON

Answer all TEN questions.

Write your answers in the spaces provided.

You must write down all stages in your working.

1 An equilateral triangle has sides of length x cm.

(a) Show that the area of the triangle is $\frac{\sqrt{3}}{4}x^2$ cm² (2)

The length of each side of the equilateral triangle is increasing at a rate of 0.1 cm/s.

(b) Find the length of each side of the triangle when the area of the triangle is increasing at a rate of $\frac{\sqrt{3}}{10}$ cm²/s. (4)

.....

.....

.....

.....

.....

.....

.....

.....

.....

.....

.....

.....

.....

.....

.....

.....

.....

.....

.....

.....

.....

.....

.....

.....

.....

.....

.....

.....

.....



2 A small stone is thrown vertically upwards from a point A above the ground. At time t seconds after being thrown from A , the height of the stone above the ground is s metres. Until the stone hits the ground, $s = 1.4 + 19.6t - 4.9t^2$

(a) Write down the height of A above the ground. (1)

(b) Find the speed with which the stone was thrown from A . (2)

(c) Find the acceleration of the stone until it hits the ground. (1)

(d) Find the greatest height of the stone above the ground. (3)

.....

.....

.....

.....

.....

.....

.....

.....

.....

.....

.....

.....

.....

.....

.....

.....

.....

.....

.....

.....

.....

.....



Question 2 continued

Handwriting practice lines for Question 2. The page contains 20 horizontal dotted lines spaced evenly down the page.

(Total for Question 2 is 7 marks)



P 4 4 0 2 9 A 0 5 3 2

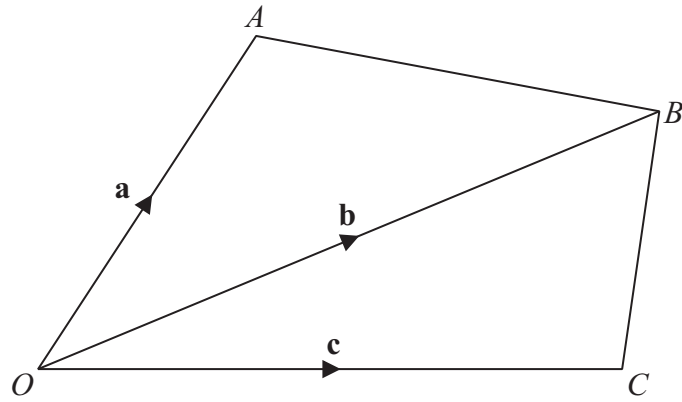


Figure 1

Figure 1 shows the quadrilateral $OABC$.

$$\vec{OA} = \mathbf{a}, \vec{OB} = \mathbf{b} \text{ and } \vec{OC} = \mathbf{c}$$

- (a) Find, in terms of \mathbf{a} and \mathbf{b} , \vec{AB} . (1)

The midpoint of OA is P and the midpoint of AB is Q .

- (b) Show that $\vec{PQ} = \mu\mathbf{b}$, where μ is a scalar, stating the value of μ . (2)

The point S lies on OC and the point R lies on BC such that $\vec{OS} = \lambda\vec{OC}$ and $\vec{BR} = \lambda\vec{BC}$.

- (c) Show that PQ is parallel to SR . (4)

Given that $\vec{PQ} = \frac{3}{2}\vec{SR}$,

- (d) find the value of λ . (2)

.....

.....

.....

.....

.....

.....

.....

.....

.....

.....



Question 3 continued

A large area for writing, consisting of numerous horizontal dotted lines.



Question 3 continued

Ruled writing area consisting of multiple horizontal dotted lines for student response.

(Total for Question 3 is 9 marks)



4

Diagram NOT
accurately drawn

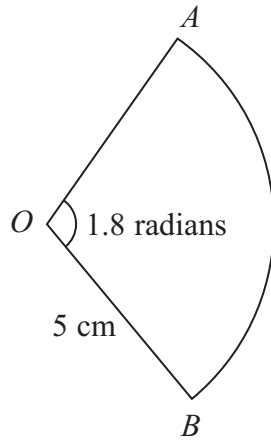


Figure 2

Figure 2 shows the sector AOB of a circle of radius 5 cm . The centre of the circle is O and the angle AOB is 1.8 radians .

- (a) Find the length of the arc AB . (1)

- (b) Find the area of the sector AOB . (2)

.....

.....

.....

.....

.....

.....

.....

.....

.....

.....

.....

.....

.....

.....

.....

.....

.....

.....

.....

.....

.....

.....

.....

(Total for Question 4 is 3 marks)



5 (a) On the axes opposite, draw the lines with equations

$$(i) y = -x - 1 \quad (ii) y = 3x - 9 \quad (iii) 2y = x + 7 \quad (4)$$

(b) Show, by shading, the region R defined by the inequalities

$$y \geq -x - 1, \quad y \geq 3x - 9 \quad \text{and} \quad 2y \leq x + 7 \quad (1)$$

For all points in R , with coordinates (x, y) ,

$$P = y - 2x$$

(c) Find (i) the greatest value of P ,

(ii) the least value of P .

(4)

.....

.....

.....

.....

.....

.....

.....

.....

.....

.....

.....

.....

.....

.....

.....

.....

.....

.....

.....

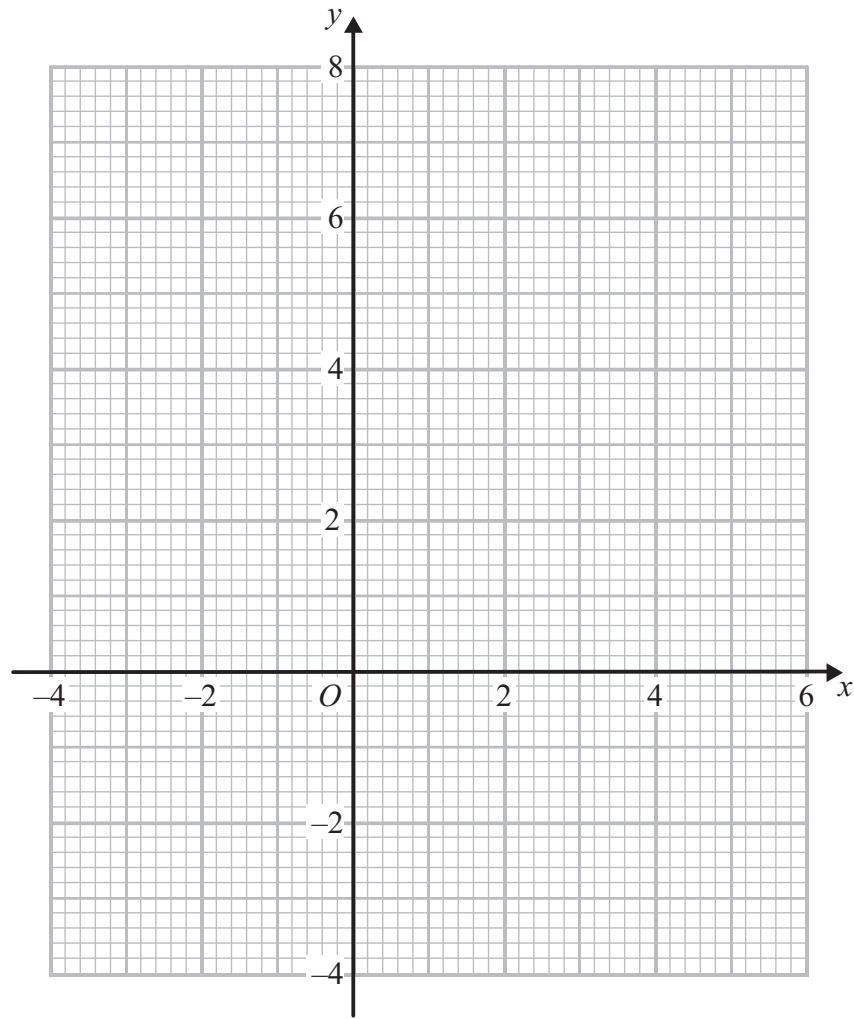
.....

.....

.....



Question 5 continued



.....

.....

.....

.....

.....

.....

.....

.....

.....

.....

.....

.....

.....

.....

.....

.....

.....

.....

.....

.....

.....

.....

.....

(Total for Question 5 is 9 marks)



Question 6 continued

A series of horizontal dotted lines for writing.



Question 6 continued

Handwriting practice area consisting of 24 horizontal dotted lines for writing.



7 The curve C has equation $y = x^2 + 3$

The point A with coordinates $(0, 3)$ and the point B with coordinates $(4, 19)$ lie on C , as shown below in Figure 3.

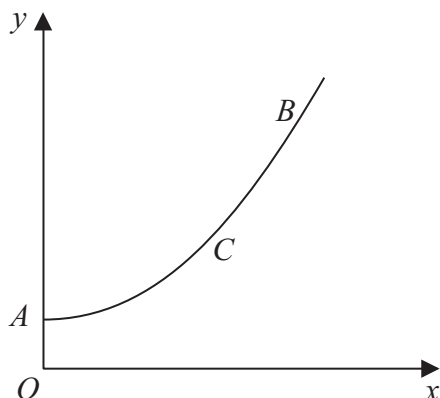


Figure 3

The finite area enclosed by the arc AB of curve C , the axes and the line with equation $x = 4$ is rotated through 360° about the x -axis.

(a) Using algebraic integration, calculate, to 1 decimal place, the volume of the solid generated.

(6)

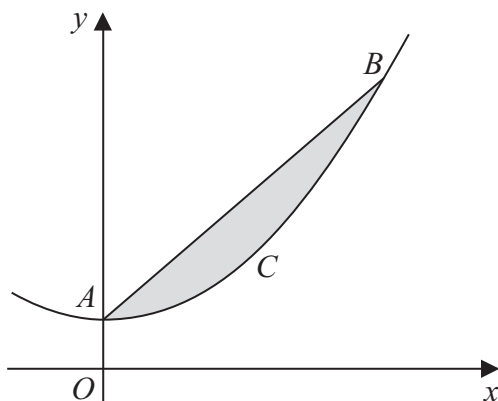


Figure 4

(b) Using algebraic integration, calculate the area of the region between the chord AB and the arc AB of C , shown shaded in Figure 4.

(6)

.....

.....

.....

.....

.....

.....

.....



Question 7 continued

A series of horizontal dotted lines for writing.



Question 7 continued

A series of horizontal dotted lines for writing.



Question 7 continued

Dotted lines for writing.

(Total for Question 7 is 12 marks)



P 4 4 0 2 9 A 0 1 9 3 2

8

$$\tan \theta = \frac{\sin \theta}{\cos \theta}$$

(a) Using the above identity, show that $1 + \tan^2 \theta = \frac{1}{\cos^2 \theta}$ (3)

(b) Show that $\frac{1 + \sin \theta \cos \theta + \sin^2 \theta}{\cos^2 \theta} = 1 + \tan \theta + 2 \tan^2 \theta$ (3)

(c) Solve the equation $1 + \sin \theta \cos \theta + \sin^2 \theta = 4 \cos^2 \theta$ for $0 \leq \theta \leq 180^\circ$.
Give your answers to 1 decimal place, where appropriate. (6)

Dotted lines for working space.



Question 8 continued

Dotted lines for writing.



Question 8 continued

A series of horizontal dotted lines for writing.



Question 8 continued

Ruled lines for writing answer.

(Total for Question 8 is 12 marks)



P 4 4 0 2 9 A 0 2 3 3 2

$$f(x) = 2x^3 + ax^2 + bx + 15 \quad \text{where } a \text{ and } b \text{ are constants.}$$

The remainder when $f(x)$ is divided by $(x - 1)$ is -12

The remainder when $f(x)$ is divided by $(x + 1)$ is 48

(a) Find the value of a and the value of b . (6)

(b) Show that $f\left(\frac{1}{2}\right) = 0$ (1)

(c) Express $f(x)$ as a product of linear factors. (4)

(d) Solve the equation $f(x) = 0$ (1)

.....
.....
.....
.....
.....
.....
.....
.....
.....
.....
.....
.....
.....
.....
.....
.....
.....
.....
.....
.....
.....
.....
.....
.....



10 The points A , B and C have coordinates $(-2, 3)$, $(2, 5)$ and $(4, 1)$ respectively.

(a) Show, by calculation, that AB is perpendicular to BC . (3)

(b) Show that the length of $AB =$ the length of BC . (3)

The midpoint of AC is M .

(c) Find the coordinates of M . (1)

(d) Find the exact length of the radius of the circle which passes through the points A , B and C . (3)

The point P lies on BM such that $BP : PM = 2 : 1$

(e) Find the coordinates of P . (2)

The point Q lies on AP produced such that $AP : PQ = 2 : 1$

(f) Find the coordinates of Q . (3)

(g) Show that Q lies on BC . (3)

.....

.....

.....

.....

.....

.....

.....

.....

.....

.....

.....

.....

.....

.....

.....

.....

.....

.....

.....

.....

.....

.....

.....

.....



Question 10 continued

A large area of the page is filled with horizontal dotted lines for writing answers.



P 4 4 0 2 9 A 0 2 9 3 2

Question 10 continued

A series of horizontal dotted lines for writing, spanning the width of the page.



